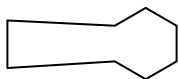




Determine which letter BEST represents the shapes that were used to create the figure shown.

Answers

1)



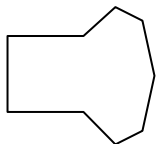
- A. quadrilateral & hexagon
- B. triangle & square
- C. heptagon & rectangle
- D. pentagon & square

2)



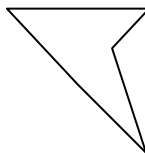
- A. rectangle & pentagon
- B. heptagon & hexagon
- C. quadrilateral & square
- D. rectangle & triangle

3)




- A. hexagon & quadrilateral
- B. octagon & pentagon
- C. quadrilateral & square
- D. quadrilateral & heptagon

4)



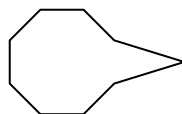
- A. pentagon & rectangle
- B. octagon & square
- C. triangle & triangle
- D. pentagon & square

5)



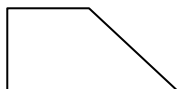
- A. triangle & pentagon
- B. octagon & rectangle
- C. square & heptagon
- D. square & triangle

6)



- A. quadrilateral & rectangle
- B. heptagon & quadrilateral
- C. heptagon & hexagon
- D. triangle & octagon

7)



- A. square & heptagon
- B. triangle & square
- C. heptagon & hexagon
- D. heptagon & octagon

8)



- A. heptagon & octagon
- B. rectangle & triangle
- C. hexagon & quadrilateral
- D. heptagon & triangle

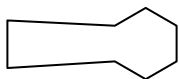
- 1. _____
- 2. _____
- 3. _____
- 4. _____
- 5. _____
- 6. _____
- 7. _____
- 8. _____



Determine which letter BEST represents the shapes that were used to create the figure shown.

Answers

1)



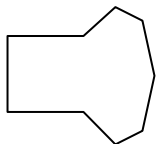
- A. quadrilateral & hexagon
- B. triangle & square
- C. heptagon & rectangle
- D. pentagon & square

2)



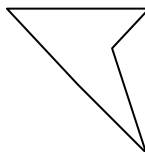
- A. rectangle & pentagon
- B. heptagon & hexagon
- C. quadrilateral & square
- D. rectangle & triangle

3)




- A. hexagon & quadrilateral
- B. octagon & pentagon
- C. quadrilateral & square
- D. quadrilateral & heptagon

4)



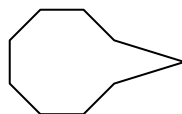
- A. pentagon & rectangle
- B. octagon & square
- C. triangle & triangle
- D. pentagon & square

5)



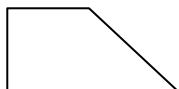
- A. triangle & pentagon
- B. octagon & rectangle
- C. square & heptagon
- D. square & triangle

6)



- A. quadrilateral & rectangle
- B. heptagon & quadrilateral
- C. heptagon & hexagon
- D. triangle & octagon

7)



- A. square & heptagon
- B. triangle & square
- C. heptagon & hexagon
- D. heptagon & octagon

8)



- A. heptagon & octagon
- B. rectangle & triangle
- C. hexagon & quadrilateral
- D. heptagon & triangle

- 1. **A**
- 2. **D**
- 3. **D**
- 4. **C**
- 5. **D**
- 6. **D**
- 7. **B**
- 8. **B**